













LÍNGUA PORTUGUESA MÓDULO I

QUESTÃO 1. NUMERE A COLUNA DE ACORDO COM AS FIGURAS:

<p>1</p>   <p>2</p>	<p>BEXIGA</p> <p>BATATA</p> <p>BALEIA</p> <p>BURRO</p> <p>BALA</p> <p>BICICLETA</p> <p>BULE</p> <p>BALDE</p> <p>BANANA</p> <p>BOLA</p> <p>BORBOLETA</p>	 <table border="1" style="border-collapse: collapse; width: 100px; height: 150px;"> <tr><td style="text-align: center;">B</td></tr> <tr><td style="height: 20px;"> </td></tr> <tr><td style="height: 20px;"> </td></tr> <tr><td style="height: 20px;"> </td></tr> <tr><td style="height: 20px;"> </td></tr> <tr><td style="height: 20px;"> </td></tr> <tr><td style="height: 20px;"> </td></tr> <tr><td style="height: 20px;"> </td></tr> <tr><td style="height: 20px;"> </td></tr> <tr><td style="height: 20px;"> </td></tr> <tr><td style="height: 20px;"> </td></tr> </table>	B											<p>11</p>  <p>4</p>  <p>5</p>  <p>10</p>  <p>9</p> 
B														
<p>3</p>  <p>6</p> 	<p>7</p> 	<p>8</p> 												

QUESTÃO 2. ARRUME AS PALAVRAS NA ORDEM CORRETA:

DA	CO	CA	
TÃO	JA	A	BO

PO	CO		
CA	CO	MA	




QUESTÃO 3. COMPLETE AS PALAVRAS COM AS VOGAIS QUE FALTAM:




V.....C.....



V.....L.....



B.....L.....



S.....L.....



.....V.....



B.....T.....



C.....P.....


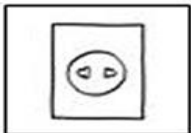
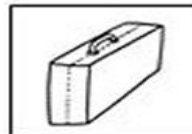
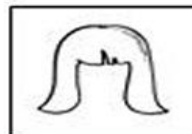




L.....V.....

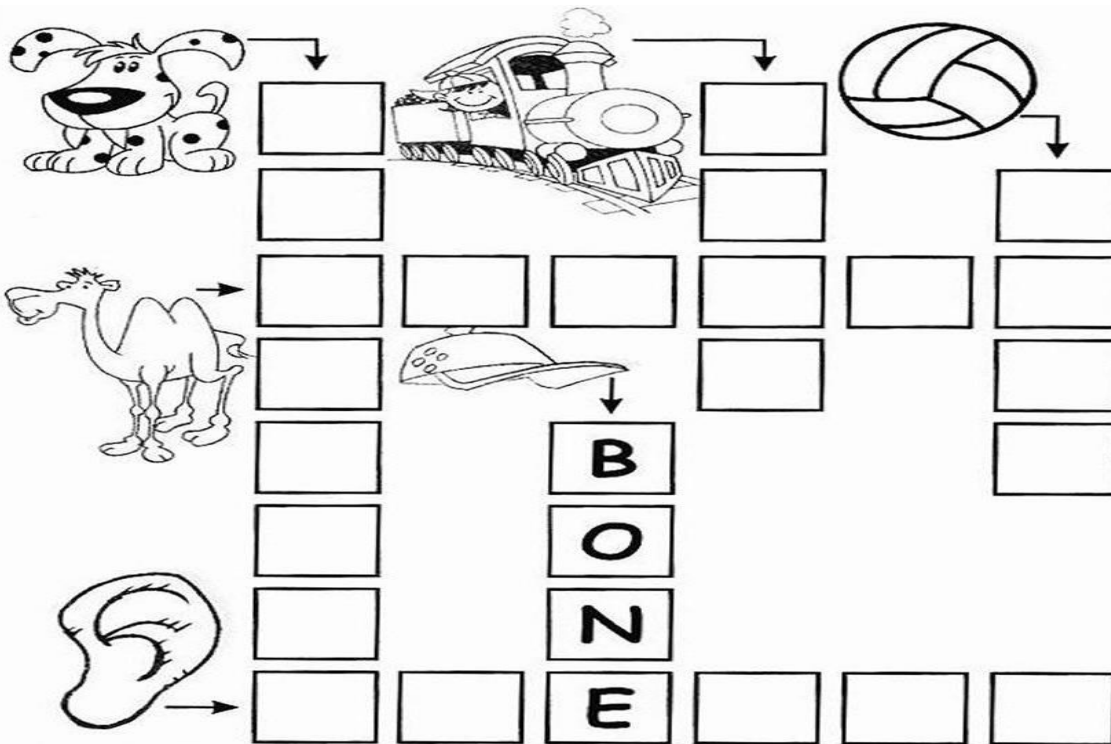


D.....D.....

QUESTÃO 4. ESCREVA OS NOMES DAS FIGURAS, UMA SÍLABA EM CADA RETÂNGULO:



QUESTÃO 5. COMPLETE A CRUZADINHA:




A crossword puzzle grid with the following illustrations and arrows indicating the starting points for the words:

- Dog:** Points to the top-left cell of the grid.
- Train:** Points to the top-middle cell of the grid.
- Volleyball:** Points to the top-right cell of the grid.
- Camel:** Points to the middle-left cell of the grid.
- Hot Air Balloon:** Points to the middle-middle cell of the grid.
- Ear:** Points to the bottom-left cell of the grid.

The word **BONE** is already filled in vertically in the middle of the grid.

<https://www.soescola.com/2017/06/atividades-educativas-imprimir-alfabetizacao-pre-silabica.html>

QUESTÃO 6. COMPLETE OS NOMES DAS FIGURAS COM CONSOANTES E VOGAIS:




Five rows of boxes for completing the names of the illustrations:

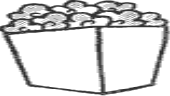
- Row 1: C [] [] I [] A [] (Illustration: Shirt)
- Row 2: P [] [] A [] [] [] O [] (Illustration: Ice cream cone)
- Row 3: [] O [] [] (Illustration: Rose)
- Row 4: [] [] S [] (Illustration: House)
- Row 5: V [] [] [] (Illustration: Flower pot)

QUESTÃO 7. FORME PALAVRAS PROCURANDO OS NUMEROS IGUAIS


1	2	2	1	6	4	3
PI	PO	PI	CO	PA	PI	ÃO
5	1	3	6	2	6	4
PÃO	LÊ	PI	NE	CA	LA	PA



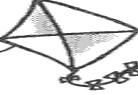
1 _____




2 _____




3 _____



4 _____

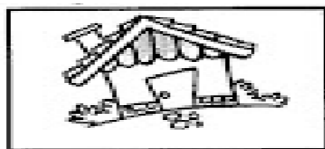


5 _____



6 _____


QUESTÃO 8. LIGUE OS DESENHOS QUE COMECEM COM A MESMA LETRA:




CASA




GATO



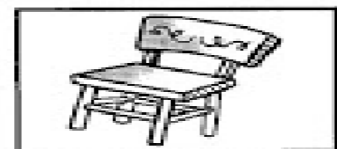
BOLO



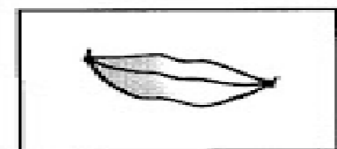
ANEL




ABACAXI



CADEIRA



BOCA



GALO

QUESTÃO 9. PROCURE NO CAÇA PALAVRAS O NOME DOS 6 ANIMAIS, EM SEGUIDA COPIE-OS ABAIXO:

MACACO - BORBOLETA - JACARÉ - CAVALO - RATO - TARTARUGA

M	I	N	H	O	C	A	S	Y	J
A	B	O	R	B	O	L	E	T	A
C	O	B	R	A	D	O	P	A	C
A	R	S	N	A	C	V	B	R	A
C	A	V	A	L	O	B	T	T	R
O	F	A	M	I	L	I	A	A	E
H	A	B	O	L	O	N	E	R	L
I	V	A	C	A	S	M	E	U	E
E	U	R	A	T	O	F	O	G	O
N	P	O	R	C	O	L	E	A	O

Disponível em: <<https://i1.wp.com/miriamveiga.com.br/wp-content/uploads/2016/06/Cruzadinha-Adi%C3%A7%C3%A3o-EJA.jpg?ssl=1>> Acesso em: 15 de abril de 2

QUESTÃO 10. PROCURE NO CAÇA PALAVRAS O NOME DE CADA DESENHO:

FADA, FIGO, FACA, FAXINA, FEIJÃO, FITA, FERRO, FAMILIA, FOLA, FOLA

A	F	A	D	A	E	I	J	O	U	I
B	O	F	A	M	Í	L	I	A	Q	L
U	F	I	T	A	H	R	C	Z	H	R
C	A	B	E	F	E	I	J	Ã	O	I
Q	F	O	C	A	Q	W	E	R	T	N
X	E	D	A	F	A	X	I	N	A	F
I	O	B	A	N	F	I	L	A	X	I
Z	C	O	F	I	G	O	T	Q	H	O
U	F	E	R	R	O	F	A	C	A	R



QUESTÃO 11. FORME PALAVRAS DE ACORDO COM OS NUMEROS INDICADOS:

1 BA	2 BO	3 FU	4 DO	5 LA
6 CU	7 MA	8 PI	9 NE	10 TA
11 CE	12 PO	13 ÇA	14 VE	15 PE
16 FI	17 LA	18 TE	19 BA	20 CA

- 1 - 5 _____ 2 - 9 - 20 _____
 6 - 2 _____ 3 - 7 - 13 _____
 4 - 11 _____ 9 - 12 - 20 _____
 10-15-18 _____ 16 - 14 - 17 _____

QUESTÃO 12. COMPLETE AS PALAVRAS COM AS LETRAS QUE FALTAM, EM SEGUIDA ENCONTRE-AS NO QUADRO ABAIXO:



□ E □ E □ O □ E



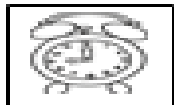
□ U □ I □ A



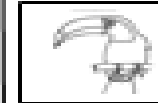
□ A □ O U □ A



□ O □ ã □



□ E □ Ó □ I □



□ U □ A □ O

T	U	C	A	N	O	A	W	E	R	T	I
N	K	O	Y	T	E	B	U	Z	I	N	A
Z	X	F	O	G	ã	O	A	D	F	G	H
K	A	B	C	D	X	Z	E	ã	Í	Q	W
T	E	L	E	F	O	N	E	R	T	Y	P
ã	É	Q	W	E	R	T	Y	U	O	P	Ç
L	J	X	Z	Y	N	B	V	C	X	S	E
A	R	E	L	Ó	G	I	O	L	O	I	Y
L	A	T	R	E	W	F	V	B	M	K	S
S	S	D	V	A	S	S	O	U	R	A	P



QUESTÃO 13. ENCONTRE NO CAÇA PREVENÇÃO AS PALAVRAS INDICADAS:

CAÇA - PREVENÇÃO












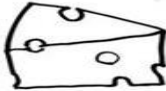


CORONAVÍRUS

Q	Y	U	S	A	B	Ã	O	I	P	C
E	M	Ç	X	M	W	Ç	P	V	Z	O
T	O	Á	O	R	N	E	B	Á	G	N
W	K	L	S	E	Y	U	T	G	S	T
R	F	C	L	C	N	I	J	U	D	A
S	H	O	T	O	A	R	K	A	J	T
D	C	O	Q	Z	D	R	Ç	L	C	O
F	B	L	M	G	K	V	A	N	A	X
G	L	Z	B	E	I	J	O	A	H	V

MÁSCARA - LENÇO - ÁLCOOL - ÁGUA
SABÃO - CONTATO - BEIJO -

www.misturadealegria.blogspot.com ADILÉA

QUESTÃO 14. ESCREVA O NOME DAS FIGURAS ABAIXO

QUESTÃO 15. ENCONTRE AS PALAVRAS NO QUADRO ABAIXO:


BARRO
SERROTE
TORRE
CORRIDA
CARROÇA
MORRO
BORRACHA
CACHORRO
ARROZ
MARRECO




REDONDA
RODA
RECEITA
RISADA
RANCHO
RIQUEZA
RATO
RONCO
RÁDIO
RIO

G	R	E	D	O	N	D	A	N	R	A	M	Í	N	D	I	O	P	B
M	I	J	O	M	C	G	C	V	O	P	A	N	S	I	N	O	A	O
V	Q	S	H	Y	X	B	O	N	N	E	R	A	N	C	H	O	P	R
N	U	E	C	Q	C	N	B	H	C	R	R	F	M	A	A	L	R	R
S	E	R	R	O	T	E	A	P	O	J	E	A	R	V	T	G	I	A
E	Z	E	A	A	M	B	R	L	Â	N	C	I	Â	N	O	D	S	C
C	A	R	R	O	Ç	A	R	B	N	A	O	W	D	R	R	G	A	H
L	D	B	O	P	U	M	O	M	L	R	B	D	I	E	R	R	D	A
P	A	R	R	O	Z	U	O	L	S	A	O	U	O	J	E	A	A	R
N	C	A	C	H	O	R	R	O	G	S	T	M	L	T	O	B	M	H
Ç	B	T	B	E	D	E	C	R	I	O	B	O	N	E	M	P	B	D
V	R	E	C	E	I	T	A	F	T	J	A	R	D	I	W	O	D	A
X	M	O	R	R	O	V	B	S	B	O	C	O	R	R	I	D	A	Y

QUESTÃO 16. LIGUE A FIGURA AO NOME CORRESPONDENTE:



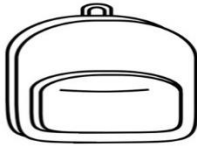
PATO
CAMA
VACA
BOLA
GATO
MAÇÃ
MOTO
BALA
BONECA
NOVELO
PIPA
IOIÔ

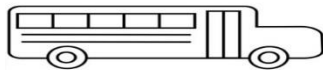




QUESTÃO 17. DESCUBRA AS PALAVRAS EMBRULHADAS NO CÍRCULO E ESCREVA NOS QUADROS:











QUESTÃO 18. JUNTE AS SÍLABAS E ESCREVA O NOME DOS DESENHOS:



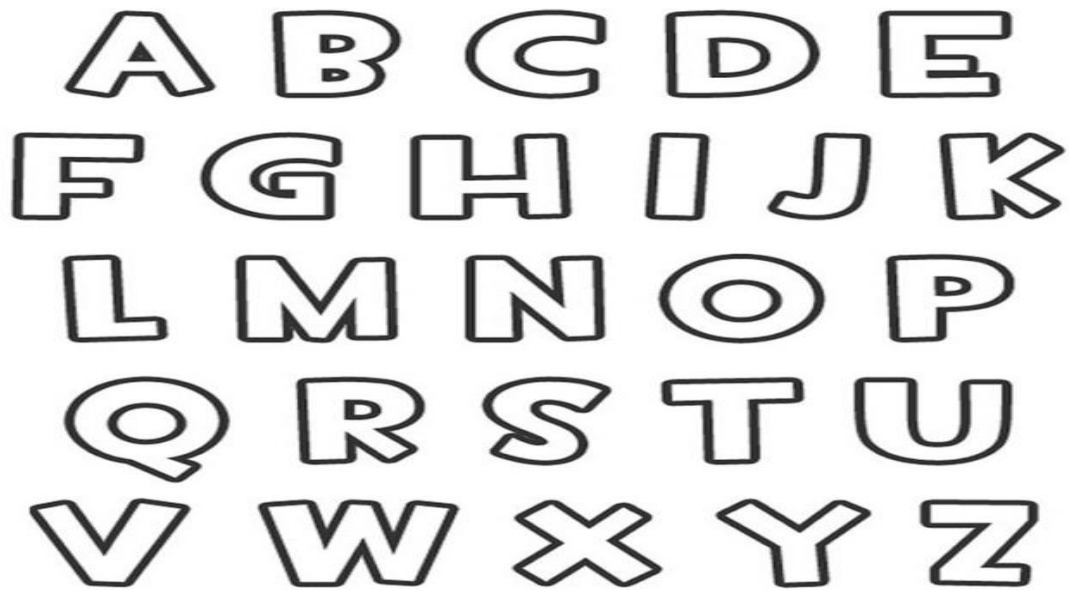






QUESTÃO 19. CIRCULE NO ALFABETO AS LETRAS QUE FORMAM O SEU PRIMEIRO

NOME:



<https://escolaeducacao.com.br/>

QUESTÃO 20. FORME PALAVRAS USANDO SÍLABAS:

BLU + SA = _____

BO + CA = _____

CO + LA = _____

LU + TA = _____

NOI + TE = _____

BLO + CO = _____

LI + VRE = _____



MATEMÁTICA MÓDULO I


QUESTÃO 1. COMPLETE A SEQUÊNCIA NUMÉRICA ABAIXO:

Complete a sequência numérica

1		3	4	5	6		8		10
11	12		14	15		17		19	20
21		23		25	26		28		30
31	32		34	35		37		39	40
41		43		45	46		48		50
51	52		54	55		57		59	60
61		63		65	66		68		70
71	72		74	75		77		79	80
81		83		85	86		88		90
91	92		94	95		97		99	100

Disponível em: <https://br.pinterest.com/pin/>

QUESTÃO 2. COMPLETE O PERCURSO EM ORDEM DECRESCENTE E AJUDE O MENINO A ENCONTRAR A BOLA.



50 49 46 45
 43
 33 34 36 38 41

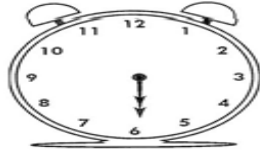
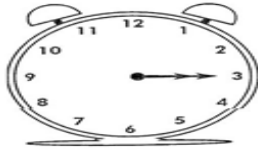

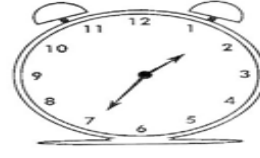
 31 28 26 25 23 22

 11 13 14 16 17 19

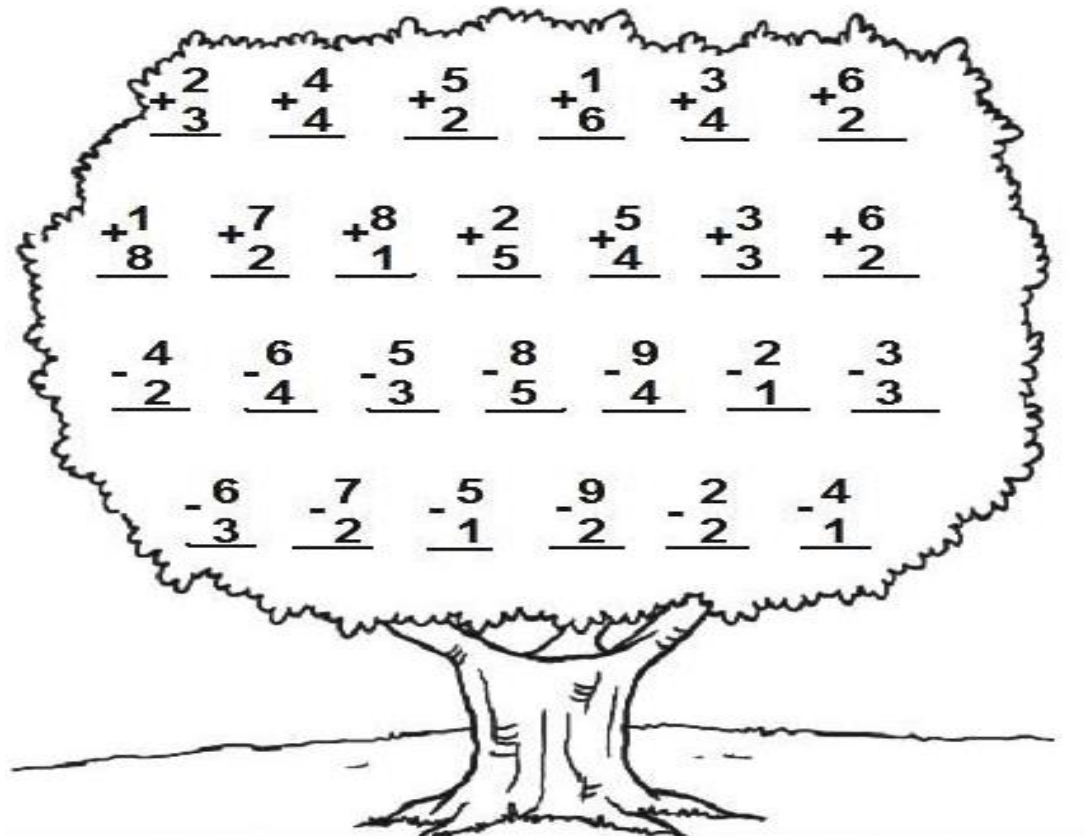
 9 7 4 3




QUESTÃO 3. OBSERVE AS HORAS EM CADA RELOGIO E ESCREVA-A ABAIXO:



QUESTÃO 4. RESOLVA AS OPERAÇÕES:




QUESTÃO 5. SIGA A SEQUÊNCIA NUMÉRICA E FORME UMA FIGURA:



Disponível em: <https://br.pinterest.com/pin/>

QUESTÃO 6. ENCONTRE 7 ERROS NAS FIGURAS ABAIXO





QUESTÃO 7. OBSERVE AS PEÇAS DO MATERIAL DOURADO E ESCRAVA A QUANTIDADE QUE ELAS REPRESENTAM:

<table border="1"> <tr> <th>DEZENAS</th> <th>UNIDADES</th> </tr> <tr> <td></td> <td></td> </tr> <tr> <td><input type="text"/></td> <td><input type="text"/></td> </tr> <tr> <td colspan="2" style="text-align: center;">+ =</td> </tr> <tr> <td><input type="text"/></td> <td><input type="text"/></td> </tr> </table>	DEZENAS	UNIDADES			<input type="text"/>	<input type="text"/>	+ =		<input type="text"/>	<input type="text"/>	<table border="1"> <tr> <th>DEZENAS</th> <th>UNIDADES</th> </tr> <tr> <td></td> <td></td> </tr> <tr> <td><input type="text"/></td> <td><input type="text"/></td> </tr> <tr> <td colspan="2" style="text-align: center;">+ =</td> </tr> <tr> <td><input type="text"/></td> <td><input type="text"/></td> </tr> </table>	DEZENAS	UNIDADES			<input type="text"/>	<input type="text"/>	+ =		<input type="text"/>	<input type="text"/>
DEZENAS	UNIDADES																				
<input type="text"/>	<input type="text"/>																				
+ =																					
<input type="text"/>	<input type="text"/>																				
DEZENAS	UNIDADES																				
<input type="text"/>	<input type="text"/>																				
+ =																					
<input type="text"/>	<input type="text"/>																				
<table border="1"> <tr> <th>DEZENAS</th> <th>UNIDADES</th> </tr> <tr> <td></td> <td></td> </tr> <tr> <td><input type="text"/></td> <td><input type="text"/></td> </tr> <tr> <td colspan="2" style="text-align: center;">+ =</td> </tr> <tr> <td><input type="text"/></td> <td><input type="text"/></td> </tr> </table>	DEZENAS	UNIDADES			<input type="text"/>	<input type="text"/>	+ =		<input type="text"/>	<input type="text"/>	<table border="1"> <tr> <th>DEZENAS</th> <th>UNIDADES</th> </tr> <tr> <td></td> <td></td> </tr> <tr> <td><input type="text"/></td> <td><input type="text"/></td> </tr> <tr> <td colspan="2" style="text-align: center;">+ =</td> </tr> <tr> <td><input type="text"/></td> <td><input type="text"/></td> </tr> </table>	DEZENAS	UNIDADES			<input type="text"/>	<input type="text"/>	+ =		<input type="text"/>	<input type="text"/>
DEZENAS	UNIDADES																				
<input type="text"/>	<input type="text"/>																				
+ =																					
<input type="text"/>	<input type="text"/>																				
DEZENAS	UNIDADES																				
<input type="text"/>	<input type="text"/>																				
+ =																					
<input type="text"/>	<input type="text"/>																				
<table border="1"> <tr> <th>DEZENAS</th> <th>UNIDADES</th> </tr> <tr> <td></td> <td></td> </tr> <tr> <td><input type="text"/></td> <td><input type="text"/></td> </tr> <tr> <td colspan="2" style="text-align: center;">+ =</td> </tr> <tr> <td><input type="text"/></td> <td><input type="text"/></td> </tr> </table>	DEZENAS	UNIDADES			<input type="text"/>	<input type="text"/>	+ =		<input type="text"/>	<input type="text"/>	<table border="1"> <tr> <th>DEZENAS</th> <th>UNIDADES</th> </tr> <tr> <td></td> <td></td> </tr> <tr> <td><input type="text"/></td> <td><input type="text"/></td> </tr> <tr> <td colspan="2" style="text-align: center;">+ =</td> </tr> <tr> <td><input type="text"/></td> <td><input type="text"/></td> </tr> </table>	DEZENAS	UNIDADES			<input type="text"/>	<input type="text"/>	+ =		<input type="text"/>	<input type="text"/>
DEZENAS	UNIDADES																				
<input type="text"/>	<input type="text"/>																				
+ =																					
<input type="text"/>	<input type="text"/>																				
DEZENAS	UNIDADES																				
<input type="text"/>	<input type="text"/>																				
+ =																					
<input type="text"/>	<input type="text"/>																				

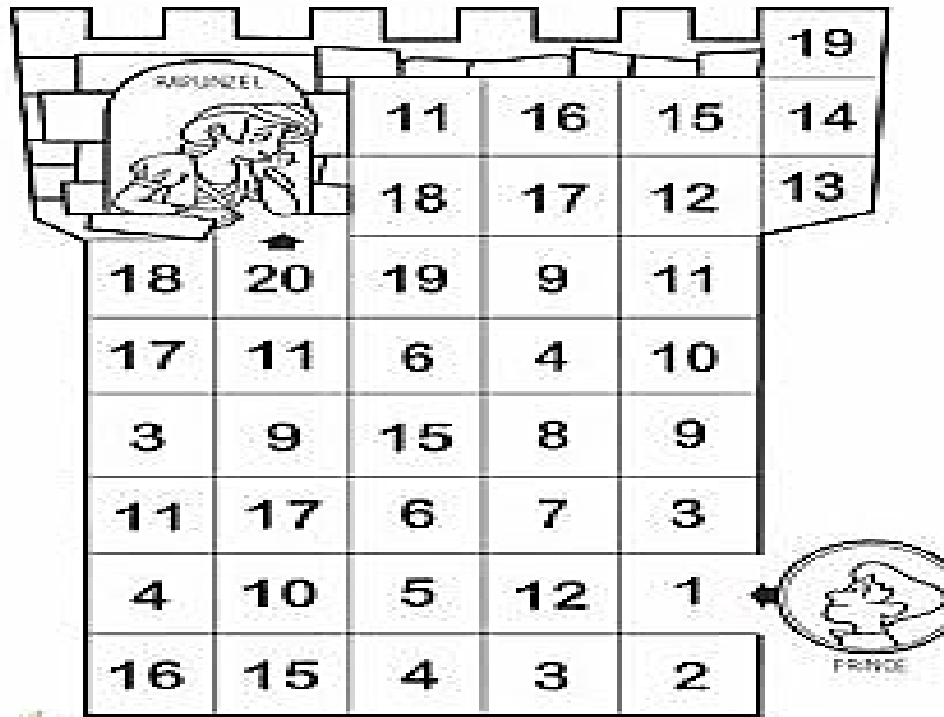
Disponível em: <https://br.pinterest.com/pin/>

QUESTÃO 8. FAÇA UM X NO NÚMERO CORRESPONDENTE A REPRESENTAÇÃO DO MATERIAL DOURADO:

<p>(13) (23) (18)</p>	<p>(18) (19) (20)</p>	<p>(18) (17) (13)</p>
<p>(13) (18) (28)</p>	<p>(25) (26) (23)</p>	<p>(26) (29) (16)</p>
<p>(17) (18) (19)</p>	<p>(13) (23) (31)</p>	<p>(13) (15) (16)</p>

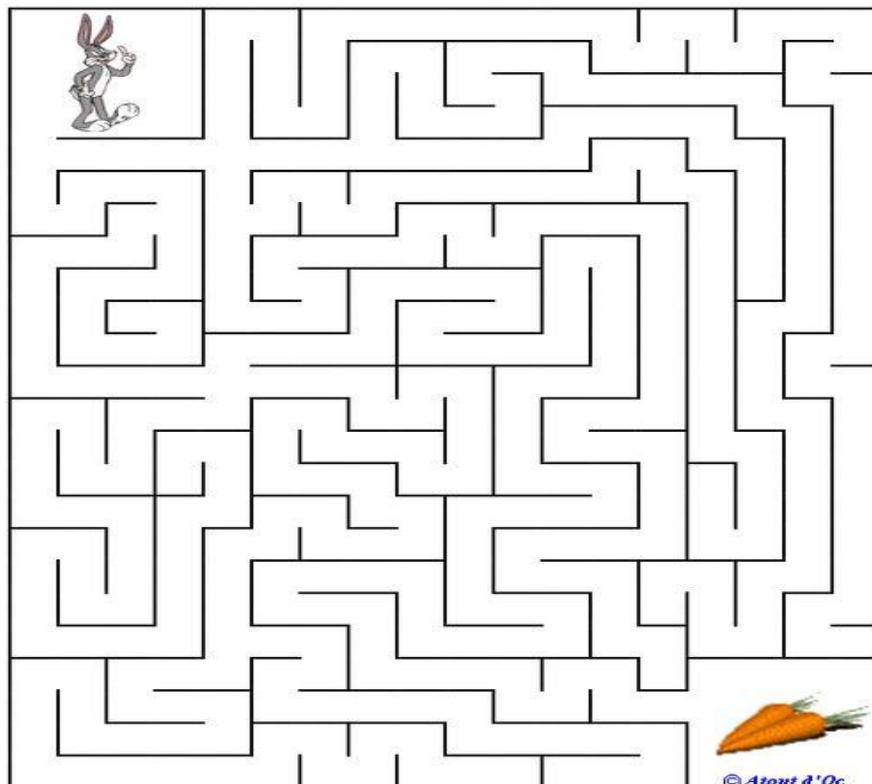


QUESTÃO 9. AJUDE O PRÍNCIPE A SALVAR RAPUNZEL, SEGUINDO A SEQUENCIA DE 1 A 20



Disponível em https://br.pinterest.com/pin/841047299142592115/?nic_v1=













QUESTÃO 10. AJUDE O COELHO A PEGAR AS CENOURAS:



Disponível em : https://br.pinterest.com/pin/193091902762118160/?nic_v1=1aog













QUESTÃO 11. RESOLVA AS ADIÇÕES DE ACORDO COM AS PEÇAS DO DOMINÓ:

		
$\text{---} + \text{---}$	$\text{---} + \text{---}$	$\text{---} + \text{---}$
$= \text{---}$	$= \text{---}$	$= \text{---}$
		
$\text{---} + \text{---}$	$\text{---} + \text{---}$	$\text{---} + \text{---}$
$= \text{---}$	$= \text{---}$	$= \text{---}$
		
$\text{---} + \text{---}$	$\text{---} + \text{---}$	$\text{---} + \text{---}$
$= \text{---}$	$= \text{---}$	$= \text{---}$
		
$\text{---} + \text{---}$	$\text{---} + \text{---}$	$\text{---} + \text{---}$
$= \text{---}$	$= \text{---}$	$= \text{---}$

Disponível em: https://br.pinterest.com/pin/193091902762118160/?nic_v1=1aog

QUESTÃO 12. DESCUBRA NO QUADRO NUMÉRICO O NUMERAL QUE ESTARIA NO LUGAR DA FIGURA:

1	2	3		5	6	7	
9	10	11	12		14	15	16
	18	19		21	22	23	
25		27	28	29		31	32
33	34		36	37	38		40

























QUESTÃO 13. COMPLETE COM OS ANTECESSORES E OS SUCESSORES DOS NUMEROS:

	5			9	
	12			17	
	23			28	
	31			35	
	46			49	

https://br.pinterest.com/pin/624241198334073491/?nic_v1=1awHXYIJu3rP5c6OVLK3GMsiXrMGa%2FxdOGiFi8gvzB7F

QUESTÃO 14. LIGUE O NUMERAL A SUA ESCRITA CORRETA:

12 .	DEZ	. 18
13 .	ONZE	. 16
10 .	DOZE	. 15
14 .	TREZE	. 19
11 .	QUATORZE	. 17
	QUINZE	
	DEZESSEIS	
	DEZESSETE	
	DEZOITO	
	DEZENOVE	

https://br.pinterest.com/pin/592293788464548906/?nic_v1=1arpZ6l9Xqcf1QGzdcppIF5vo

QUESTÃO 15. VEJA QUANTO TEM EM DINHEIRO E ESCREVA AO LADO:

	<input type="text"/>
	<input type="text"/>
	<input type="text"/>
	<input type="text"/>
	<input type="text"/>

Disponível em: https://br.pinterest.com/pin/594967800741724572/?nic_v1=1aZcUUEW0xb2livm5SLtoPnN1

QUESTÃO 16. RESOLVA AS ADIÇÕES E SUBTRAÇÕES DA CRUZADINHA:

4			
+2		-1	+5
	+3	-4	+2
-1	+2		-3
	+2		
	-3		

QUESTÃO 17. RESOLVA AS ADIÇÕES:

$$\begin{array}{r} 13 \\ + 41 \\ \hline \end{array}$$

$$\begin{array}{r} 05 \\ + 21 \\ \hline \end{array}$$

$$\begin{array}{r} 66 \\ + 21 \\ \hline \end{array}$$



$$\begin{array}{r} 22 \\ + 36 \\ \hline \end{array}$$

$$\begin{array}{r} 24 \\ + 43 \\ \hline \end{array}$$

$$\begin{array}{r} 36 \\ + 13 \\ \hline \end{array}$$

$$\begin{array}{r} 27 \\ + 12 \\ \hline \end{array}$$

$$\begin{array}{r} 31 \\ + 22 \\ \hline \end{array}$$

$$\begin{array}{r} 46 \\ + 13 \\ \hline \end{array}$$

$$\begin{array}{r} 29 \\ + 30 \\ \hline \end{array}$$

$$\begin{array}{r} 10 \\ + 18 \\ \hline \end{array}$$

$$\begin{array}{r} 72 \\ + 12 \\ \hline \end{array}$$

$$\begin{array}{r} 44 \\ + 45 \\ \hline \end{array}$$

$$\begin{array}{r} 16 \\ + 33 \\ \hline \end{array}$$

$$\begin{array}{r} 25 \\ + 14 \\ \hline \end{array}$$

$$\begin{array}{r} 37 \\ + 22 \\ \hline \end{array}$$

$$\begin{array}{r} 55 \\ + 34 \\ \hline \end{array}$$

$$\begin{array}{r} 61 \\ + 23 \\ \hline \end{array}$$

https://br.pinterest.com/pin/828943875140373612/?nic_v1=1aYZB80hY8WrM9YCAoE4TSz8%2F8mJiEVQJBQebM7fxDSzXgAd1b

QUESTÃO 18. OBSERVE OS PREÇOS ABAIXO:



R\$5,00



R\$15,00



R\$40,00

- A) QUAL DELES É O MAIS CARO? _____
- B) QUAL DELES É O MAIS BARATO? _____
- C) QUANTO CUSTA 1 BLUSA MAIS 1 CALÇA= _____
- D) QUANTO CUSTA 1 BLUSA MAIS 1 CUECA= _____
- E) QUANTO CUSTA 1 CUECA MAIS 1 CALÇA= _____



QUESTÃO 19. ORDENE OS NUMERAIS ABAIXO DO MENOR PARA O MAIOR.

45 – 29 – 12 – 6 – 67 – 8 – 77 -

QUESTÃO 20. PROCURE NO CAÇA-PALAVRAS OS NOMES DOS SÓLIDOS GEOMÉTRICOS:

